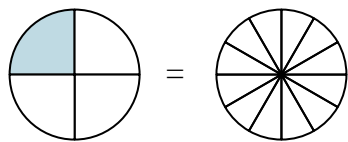


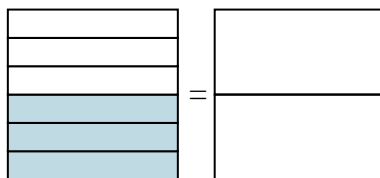


Shade in the visual fraction to find the equivalent fraction.

Ex)  $\frac{1}{4} = \frac{3}{12}$



1)  $\frac{3}{6} =$



Ex.  $\frac{3}{12}$

1. \_\_\_\_\_

2. \_\_\_\_\_

3. \_\_\_\_\_

4. \_\_\_\_\_

5. \_\_\_\_\_

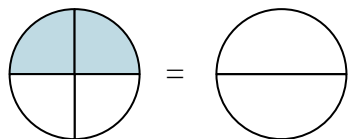
6. \_\_\_\_\_

7. \_\_\_\_\_

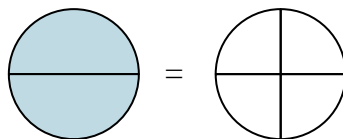
8. \_\_\_\_\_

9. \_\_\_\_\_

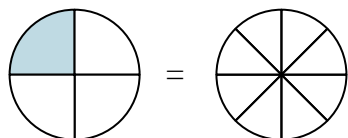
2)  $\frac{2}{4} =$



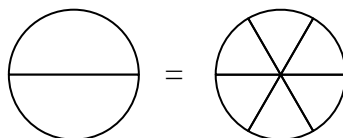
3)  $\frac{2}{2} =$



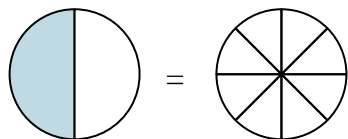
4)  $\frac{1}{4} =$



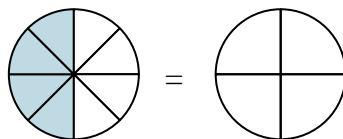
5)  $\frac{0}{2} =$



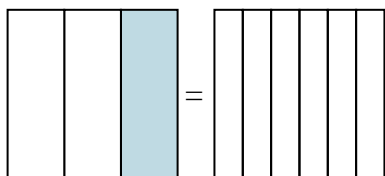
6)  $\frac{1}{2} =$



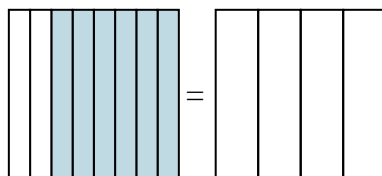
7)  $\frac{4}{8} =$



8)  $\frac{1}{3} =$

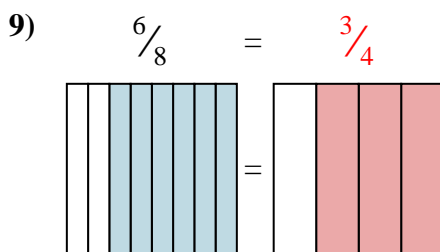
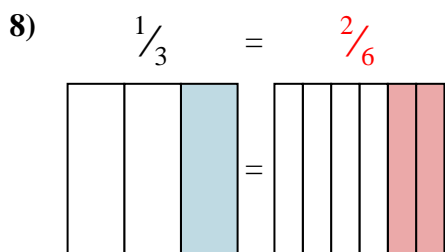
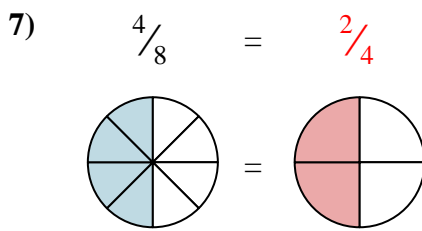
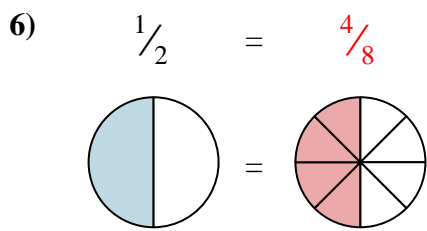
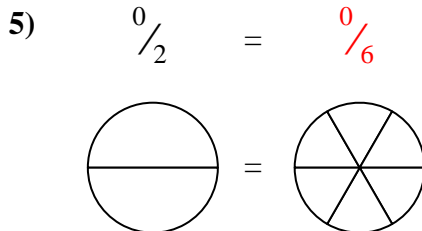
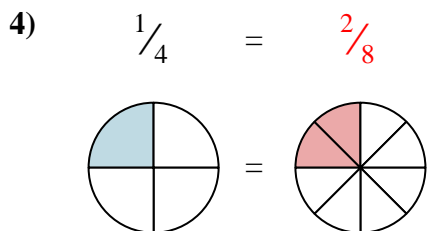
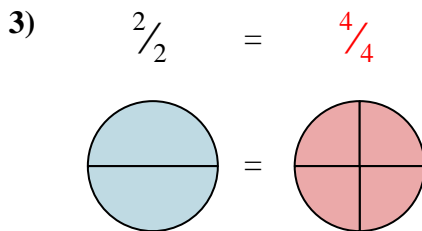
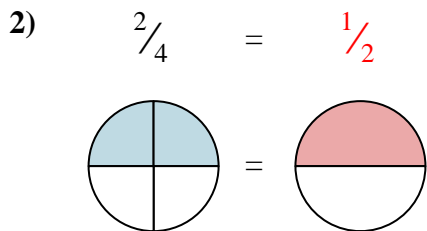
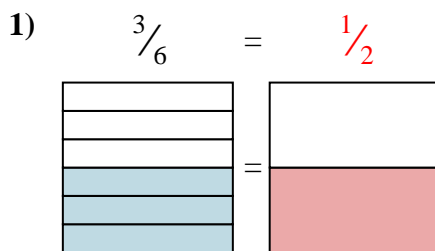
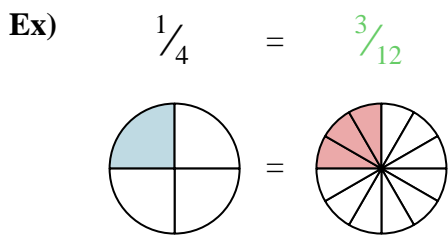


9)  $\frac{6}{8} =$





Shade in the visual fraction to find the equivalent fraction.



Answers

- Ex.  $\frac{3}{12}$
1.  $\frac{1}{2}$
2.  $\frac{1}{2}$
3.  $\frac{4}{4}$
4.  $\frac{2}{8}$
5.  $\frac{0}{6}$
6.  $\frac{4}{8}$
7.  $\frac{2}{4}$
8.  $\frac{2}{6}$
9.  $\frac{3}{4}$